


Adding and Subtracting Fractions - **Answers**

Use the shapes to help you add and subtract the fractions below:



$$\frac{2}{5}$$

+

$$\frac{1}{5}$$

=

$$\frac{3}{5}$$




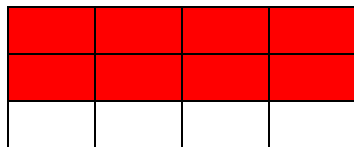
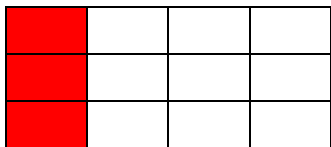
$$\frac{1}{6}$$

+

$$\frac{1}{3}$$

=

$$\frac{3}{6}$$




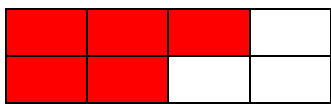
$$\frac{1}{4}$$

+

$$\frac{2}{3}$$

=

$$\frac{11}{12}$$



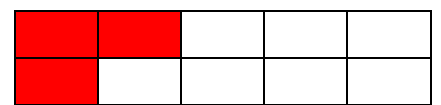
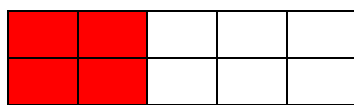
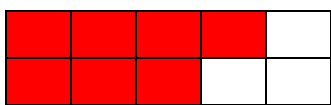
$$\frac{5}{8}$$

-

$$\frac{1}{8}$$

=

$$\frac{4}{8}$$



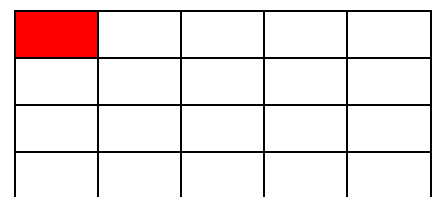
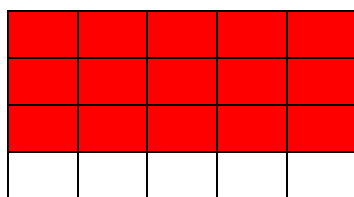

$$\frac{7}{10}$$

-

$$\frac{2}{5}$$

=

$$\frac{3}{10}$$



$$\frac{4}{5}$$

-

$$\frac{3}{4}$$

=

$$\frac{1}{20}$$